

EE 206: Homework #10 Solution

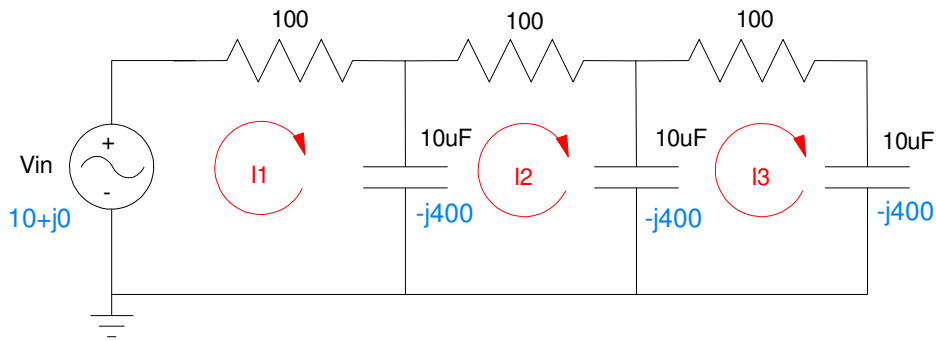
Current Loops, Op-Amps, Superposition with Phasors
Due Monday, April 20th

Problem 1) Assume

$$V_{in} = 10 \cos(250t)$$

1a) Write the current-loop equations for the following circuit.

1b) Solve for I_1 , I_2 , and I_3



Convert to phasor notation

$$s = j\omega = j250$$

$$V_{in} = 10 + j0$$

$$C \rightarrow \frac{1}{j\omega C} = -j400$$

Write the current loop equations

$$-10 + 100I_1 - j400(I_1 - I_2) = 0$$

$$-j400(I_2 - I_1) + 100I_2 - j400(I_2 - I_3) = 0$$

$$-j400(I_3 - I_2) + 100I_3 - j400I_3 = 0$$

Group terms

$$(100 - j400)I_1 + (j400)I_2 = 10$$

$$(j400)I_1 + (100 - j800)I_2 + (j400)I_3 = 0$$

$$(j400)I_2 + (100 - j800)I_3 = 0$$

Place in matrix form

$$\begin{bmatrix} (100-j400) & j400 & 0 \\ j400 & (100-j800) & j400 \\ 0 & j400 & (100-j800) \end{bmatrix} \begin{bmatrix} I_1 \\ I_2 \\ I_3 \end{bmatrix} = \begin{bmatrix} 5 \\ 0 \\ 0 \end{bmatrix}$$

Solve using Matlab

```
A = [100-j*400, j*400, 0 ; j*400, 100-j*800, j*400 ; 0, j*400, 100-j*800]
```

```
100. - 400.i    400.i    0
400.i          100. - 800.i  400.i
0              400.i       100. - 800.i
```

```
B = [10;0;0]
```

```
10.
0.
0.
```

```
I = inv(A)*B
```

```
I1    0.0343 + 0.0327i
I2    0.0261 + 0.0163i
I3    0.0139 + 0.0064i
```

meaning

$$i_1(t) = 0.0343 \cos(250t) - 0.0327 \sin(250t)$$

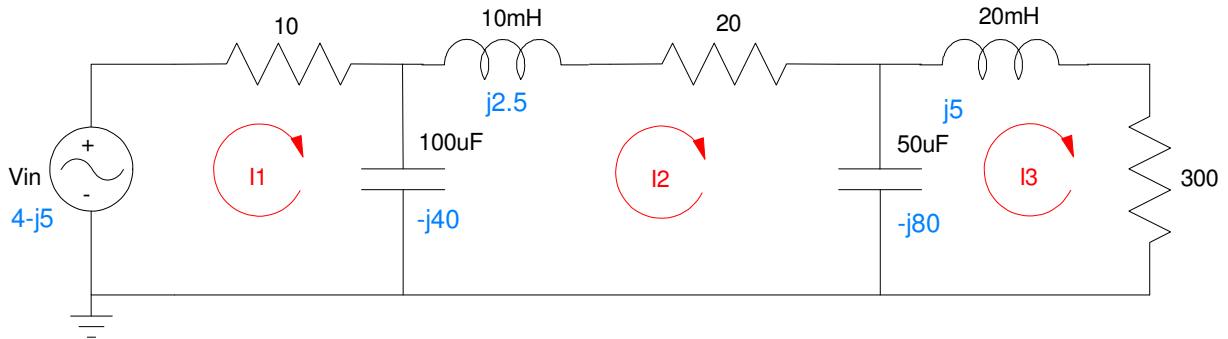
$$i_2(t) = 0.0261 \cos(250t) - 0.0163 \sin(250t)$$

$$i_3(t) = 0.0139 \cos(250t) - 0.0064 \sin(250t)$$

Problem 2) Assume

$$V_{in} = 4 \cos(250t) + 5 \sin(250t)$$

2a) Write the voltage node equations for the following circuit



Convert to phasor notation (shown in blue)

$$V_{in} = 4 - j5$$

$$s = j\omega = j250$$

$$L \rightarrow j\omega L$$

$$C \rightarrow \frac{1}{j\omega C}$$

Write the current loop equations

$$-(4 - j5) + 10I_1 - j40(I_1 - I_2) = 0$$

$$-j40(I_2 - I_1) + (20 + j2.5)I_2 - j80(I_2 - I_3) = 0$$

$$-j80(I_3 - I_2) + j5I_3 + 300I_3 = 0$$

Group terms

$$(10 - j40)I_1 + (j40)I_2 = 4 - j5$$

$$(j40)I_1 + (20 - j117.5)I_2 + (j80)I_3 = 0$$

$$(j80)I_2 + (300 - j75)I_3 = 0$$

Place in matrix form

$$\begin{bmatrix} (10-j40) & j40 & 0 \\ j40 & (10-j117.5) & j80 \\ 0 & j80 & (300-j75) \end{bmatrix} \begin{bmatrix} I_1 \\ I_2 \\ I_3 \end{bmatrix} = \begin{bmatrix} 4-j5 \\ 0 \\ 0 \end{bmatrix}$$

Solve in Matlab

```
A = [10-j*40, j*40, 0 ; j*40, 10-j*117.5, j*80 ; 0, j*80, 300 - j*75]
```

```
10. - 40.i      40.i      0
40.i           10. - 117.5i  80.i
0              80.i        300. - 75.i
```

```
B = [4-j*5 ; 0 ; 0]
```

```
4. - 5.i
0
0
```

```
I = inv(A)*B
```

```
I1    0.2092021 + 0.0436046i
I2    0.0733009 - 0.0040949i
I3    0.0035715 - 0.0186540i
```

or in terms of mA

```
I = inv(A)*B * 1000
```

```
I1    209.20207 + 43.604619i    mA
I2    73.300916 - 4.094863i    mA
I3    3.5715428 - 18.654025i   mA
```

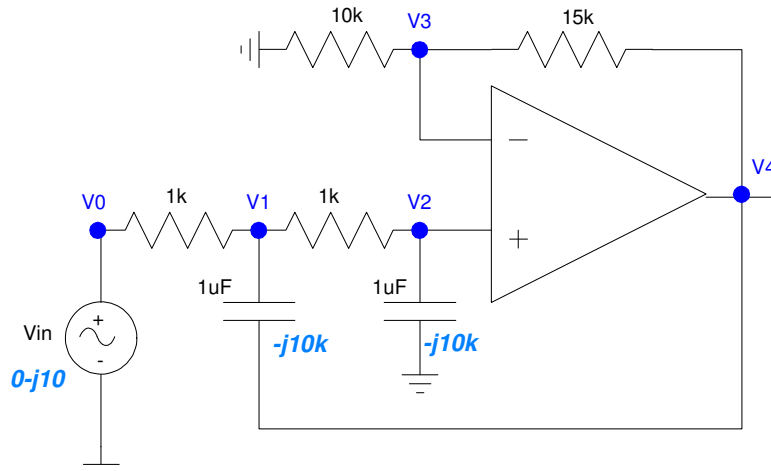
meaning

```
I1 = 209.20207 cos(250t) - 43.60461 sin(250t)    mA
I2 = 73.30091 cos(250t) + 4.094863 sin(50t)     mA
I3 = 3.57154 cos(250t) + 18.65402 sin(250t)     mA
```

Problem 3) Assume

$$V_{in} = 10 \sin(100t)$$

3a) Write the voltage node equations



$$V_2 = V_3$$

$$V_0 = 0 - j10$$

$$\left(\frac{V_1 - V_0}{1k} \right) + \left(\frac{V_1 - V_4}{-j10k} \right) + \left(\frac{V_1 - V_2}{1k} \right) = 0$$

$$\left(\frac{V_2 - V_1}{1k} \right) + \left(\frac{V_2}{-j10k} \right) = 0$$

$$\left(\frac{V_3}{10k} \right) + \left(\frac{V_3 - V_4}{15k} \right) = 0$$

3b) Solve for V1 .. V4. Group terms. Scale by 1000 for equations 3,4,5

$$V_2 - V_3 = 0$$

$$V_0 = 0 - j10$$

$$\left(\frac{-1}{1k} \right) V_0 + \left(\frac{1}{1k} + \frac{1}{-j10k} + \frac{1}{1k} \right) V_1 - \left(\frac{1}{1k} \right) V_2 - \left(\frac{1}{-j10k} \right) V_4 = 0$$

$$-\left(\frac{1}{1k} \right) V_1 + \left(\frac{1}{1k} + \frac{1}{-j10k} \right) V_2 = 0$$

$$\left(\frac{1}{10k} + \frac{1}{15k} \right) V_3 - \left(\frac{1}{15k} \right) V_4 = 0$$

Place in matrix form. Multiply the last three equations by 1000 to clear the 'k' terms

$$\begin{bmatrix} 0 & 0 & 1 & -1 & 0 \\ 1 & 0 & 0 & 0 & 0 \\ -1 & 2+j0.1 & -1 & 0 & -j0.1 \\ 0 & -1 & 1+j0.1 & 0 & 0 \\ 0 & 0 & 0 & 0.1667 & -0.0667 \end{bmatrix} \begin{bmatrix} V_0 \\ V_1 \\ V_2 \\ V_3 \\ V_4 \end{bmatrix} = \begin{bmatrix} 0 \\ -j10 \\ 0 \\ 0 \\ 0 \end{bmatrix}$$

Solve

$$A = [0,0,1,-1,0 ; 1,0,0,0,0 ; -1,2+j*0.1,-1,0,-j*0.1 ; 0,-1,1+j*0.1,0,0 ; 0,0,0,0.1667,-0.0667]$$

$$\begin{bmatrix} 0 & 0 & 1. & - 1. & 0 \\ 1. & 0 & 0 & 0 & 0 \\ - 1. & 2. - 0.1i & - 1. & 0 & 0.1i \\ 0 & - 1. & 1. + 0.1i & 0 & 0 \\ 0 & 0 & 0 & 0.1667 & - 0.0667 \end{bmatrix}$$

$$B = [0;-j*10;0;0;0]$$

$$\begin{bmatrix} 0 \\ - 10.i \\ 0 \\ 0 \\ 0 \end{bmatrix}$$

$$V = \text{inv}(A) * B$$

$$\begin{bmatrix} 0 & -10.0000i \\ 0.4979 & -10.1262i \\ -0.5096 & -10.0752i \\ -0.5096 & -10.0752i \\ -1.2737 & -25.1805i \end{bmatrix}$$

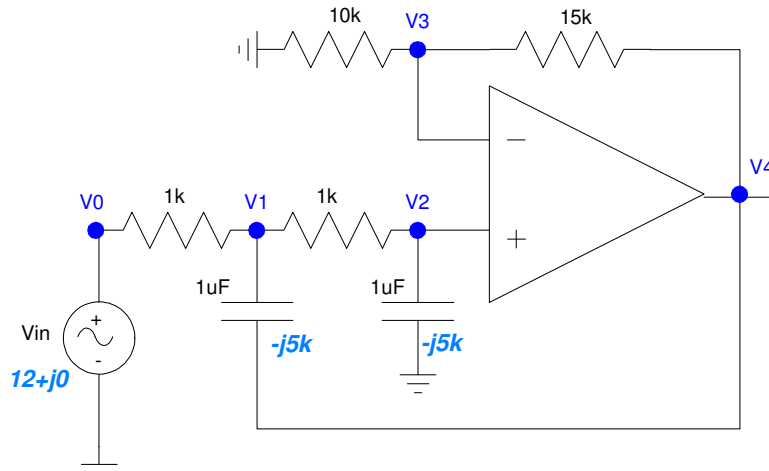
meaning

$$\begin{aligned} V_0 &= 10 \sin(100t) \\ V_1 &= 0.4879 \cos(100t) + 10.1262 \sin(100t) \\ V_2 &= -0.5096 \cos(100t) + 10.0752 \sin(100t) \\ V_3 &= -0.5096 \cos(100t) + 10.0752 \sin(100t) \\ V_4 &= -1.2737 \cos(100t) + 25.1805 \sin(100t) \end{aligned}$$

Problem 4) Assume

$$V_{in} = 12 \cos(200t)$$

4a) Write the voltage node equations



Everything stays the same except for V₀ and the capacitors (complex terms)

$$V_2 - V_3 = 0$$

$$V_0 = 12 + j0$$

$$\left(\frac{-1}{1k}\right) V_0 + \left(\frac{1}{1k} + \frac{1}{-j5k} + \frac{1}{1k}\right) V_1 - \left(\frac{1}{1k}\right) V_2 - \left(\frac{1}{-j5k}\right) V_4 = 0$$

$$-\left(\frac{1}{1k}\right) V_1 + \left(\frac{1}{1k} - \frac{1}{-j5k}\right) V_2 = 0$$

$$\left(\frac{1}{10k} + \frac{1}{15k}\right) V_3 - \left(\frac{1}{15k}\right) V_4 = 0$$

In matrix form

$$\begin{bmatrix} 0 & 0 & 1 & -1 & 0 \\ 1 & 0 & 0 & 0 & 0 \\ -1 & 2 + j0.2 & -1 & 0 & -j0.2 \\ 0 & -1 & 1 + j0.2 & 0 & 0 \\ 0 & 0 & 0 & 0.1667 & -0.0667 \end{bmatrix} \begin{bmatrix} V_0 \\ V_1 \\ V_2 \\ V_3 \\ V_4 \end{bmatrix} = \begin{bmatrix} 0 \\ 12 + j0 \\ 0 \\ 0 \\ 0 \end{bmatrix}$$

Solving in Matlab

```
A = [0,0,1,-1,0 ; 1,0,0,0,0 ; -1,2+j*0.2,-1,0,-j*0.2 ; 0,-1,1+j*0.2,0,0 ;
0,0,0,0.1667,-0.0667]
```

```

0      0      1.      - 1.      0
1.     0      0      0      0
- 1.   2. - 0.2i - 1.     0      0.2i
0     - 1.     1. + 0.2i  0      0
0      0      0      0.1667 - 0.0667
```

```
B = [0;12+j*0;0;0;0]
```

```

0
12.
0
0
0
```

```
V = inv(A) * B
```

```

12.0000
12.6234 + 1.1831i
12.3654 - 1.2900i
12.3654 - 1.2900i
30.9043 - 3.2240i
```

meaning

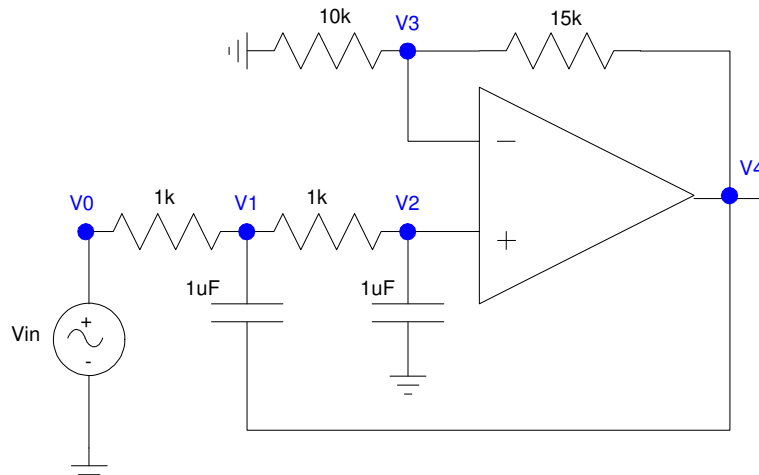
```

V0 = 12.0000 cos(200t)
V1 = 12.6234 cos(200t) - 1.1831 sin(200t)
V2 = 12.3654 cos(200t) + 1.2900 sin(200t)
V3 = 12.3654 cos(200t) + 1.2900 sin(200t)
V4 = 30.9043 cos(200t) + 3.2240 sin(200t)
```


Problem 5) Assume

$$V_{in} = 10 \sin(100t) + 12 \cos(200t)$$

Determine V1 .. V4



Use superposition; add solution #4 to solution #5

problem 5 = problem 3 + problem 4

$$V_o = 10 \sin(100t) + 12.0000 \cos(200t)$$

$$V_1 = 0.4879 \cos(100t) + 10.1262 \sin(100t) + 12.6234 \cos(200t) - 1.1831 \sin(200t)$$

$$V_2 = -0.5096 \cos(100t) + 10.0752 \sin(100t) + 12.3654 \cos(200t) + 1.2900 \sin(200t)$$

$$V_3 = -0.5096 \cos(100t) + 10.0752 \sin(100t) + 12.3654 \cos(200t) + 1.2900 \sin(200t)$$

$$V_4 = -1.2737 \cos(100t) + 25.1805 \sin(100t) + 30.9043 \cos(200t) + 3.2240 \sin(200t)$$