

ECE 376 - Test #2: Name _____

C-Programming on a PIC Processor

Open book, open notes. Calculators and Matlab permitted.
Individual effort (giving or receiving help from others or from Chegg not allowed).

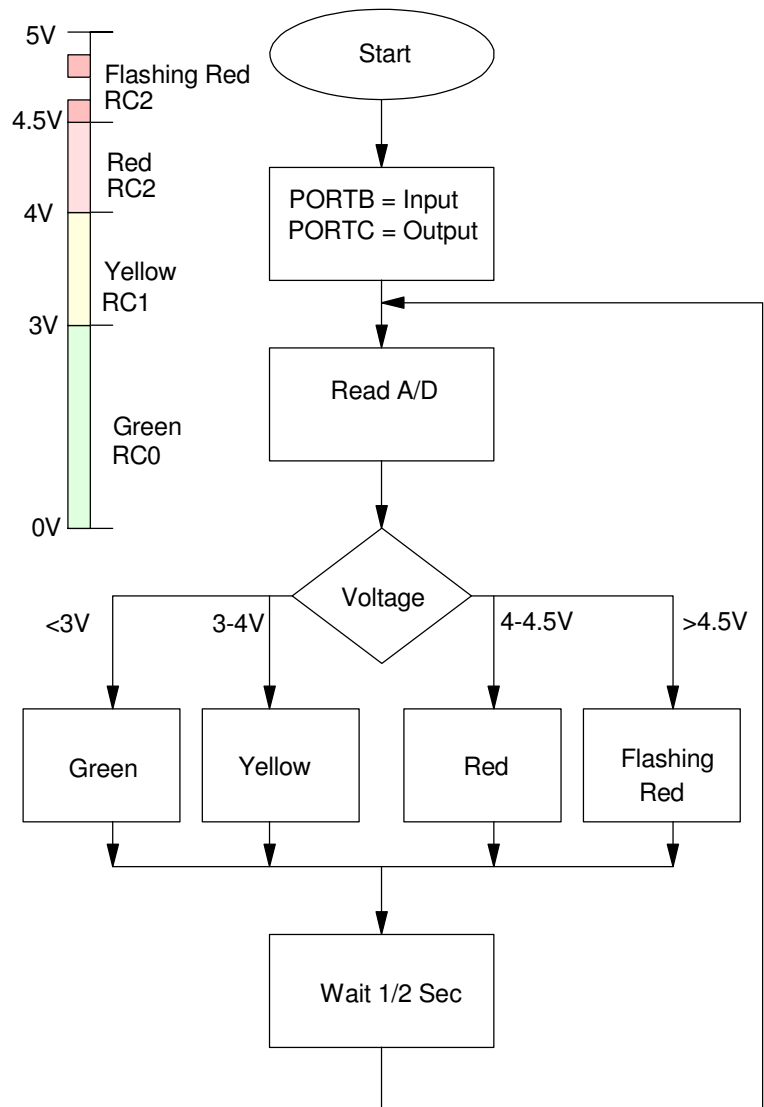
1) C Coding (25 points)

A thermistor is connected to the analog input (RA0) so that the voltage goes up as temperature goes up. Write a C program that turns on lights based upon voltage:

- $A/D > 4.5V$ Red LED blinks on for 500ms, then off for 500ms (RC1)
- $4V < A/D < 4.5V$ Red LED turns on (RC2 = 1)
- $3V < A/D < 4V$ Yellow LED turns on (RC1 = 1)
- $A/D < 3V$ Green LED turns on (RC0 = 1)

Assume the A/D is initialized and subroutining A2D_Read(x) is available.

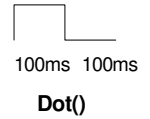
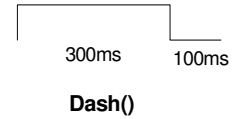
```
void main(void)
{
    ADCON1 = 0x0F;
    A2D_Init();
}
```



2) Morse Code: Bottom Up Programming (25 points)

a) Write a subroutines Dash() and Dot() which output a single dash and dot for Morse code when called:

- Dash(): RC0 goes high for 300ms the low for 100ms
- Dot(): RC0 goes hight for 100ms then low for 100ms



```
void Dash(void) {
```

```
void Dot(void) {
```

b) Write a subroutine which outputs Morse code for numbers {0, 1, 2} when numbers {0, 1, 2} are passed to it:

0



1



2



```
void Morse(unsigned char X)
```

3) Analog Inputs (25 points)

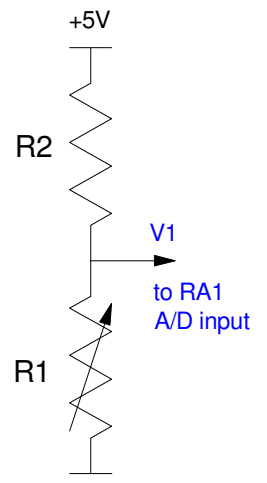
A light sensor has a resistance vs. lux relationship of

$$R_1 = \left(\frac{10,000}{(Lux)^{0.6}} \right) \Omega$$

Determine the following assuming

- The A/D reading is 513, and
- $R_2 = 800 + 100(\text{your birth month}) + (\text{your birth date})$

R2 800 + 100*mo + day	V1	A/D Reading	R1	Lux
		513		



4) chi-squared test (10 points)

Hector has been recording temperatures in Fargo since 1942 (81 years). For the past 27 years, 16 years where in the hottest 33%, six in the middle 33%, and five in the coldest 33%.

Use a chi-squared test to determine if the weather in Fargo is changing (probability of rejecting the null hypothesis: each interval is equally likely)

# Wins wins after 16 games	p binomial distribution	np expected results	N actual results	Chi-Squared
Hottest 33%	1/3	9	16	
Middle 33%	1/3	9	6	
Coldest 33%	1/3	9	5	
			Total	

Chi-Squared Table

Probability of rejecting the null hypothesis

dof	99%	95%	90%	80%	60%	40%	20%	10%	5%	1%
1	6.64	3.84	2.71	1.65	0.71	0.28	0.06	0.02	0	0
2	9.21	5.99	4.61	3.22	1.83	1.02	0.45	0.21	0.05	0.01
3	11.35	7.82	6.25	4.64	2.95	1.87	1.01	0.58	0.22	0.07
4	13.28	9.49	7.78	5.99	4.05	2.75	1.65	1.06	0.48	0.21
5	15.09	11.07	9.24	7.29	5.13	3.66	2.34	1.61	0.83	0.41
6	16.81	12.59	10.64	8.55	6.21	4.57	3.07	2.20	1.63	0.87
7	18.47	14.06	12.02	9.80	7.28	5.49	3.82	2.83	2.17	1.24

5) t-Tests (15 points)

Hector airport has been monitoring the weather in Fargo since 1942.

Population	mean	standard deviation	sample size
A: 1996 - 2022	42.7559F	2.1936F	27
B: 1942-1968	40.5330F	1.7303F	27

Use a student t-test to determine the probability that population A has a higher mean than population B.

- What is the probability that Fargo is getting warmer?
- Note: population question. What is the chance that Fargo is getting warmer?

Student t-Table										
area of tail										
dof \ p	0.25	0.20	0.15	0.10	0.05	0.025	0.01	0.005	0.001	0.0005
1	1	1.38	1.96	3.08	6.31	12.71	31.82	63.66	318.31	636.62
2	0.82	1.06	1.39	1.89	2.92	4.3	6.97	9.93	22.33	31.6
3	0.77	0.98	1.25	1.64	2.35	3.18	4.54	5.84	10.22	12.92
4	0.74	0.94	1.19	1.53	2.13	2.78	3.75	4.6	7.17	8.61
5	0.73	0.92	1.16	1.48	2.02	2.57	3.37	4.03	5.89	6.87
6	0.72	0.91	1.13	1.44	1.94	2.45	3.14	3.71	5.21	5.96
7	0.71	0.90	1.12	1.41	1.89	2.36	3.00	3.50	4.78	5.41
infinity	0.674	0.842	1.036	1.282	1.645	1.960	2.326	2.576	3.090	3.29

