

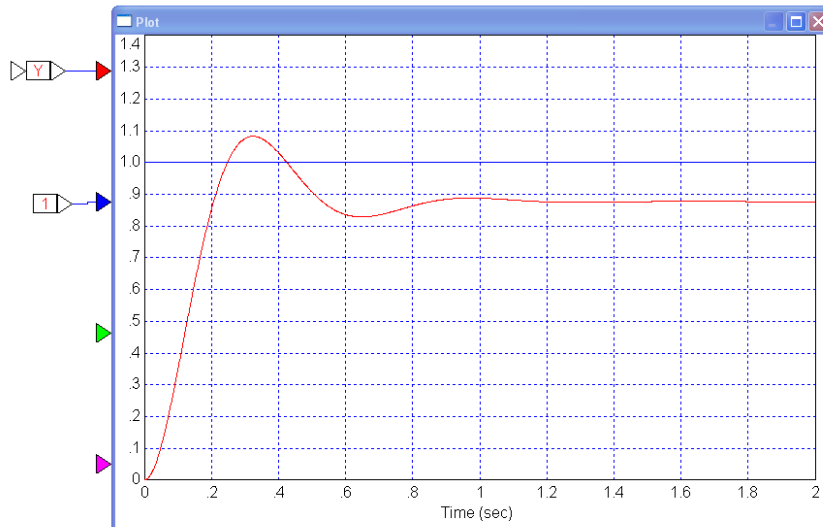
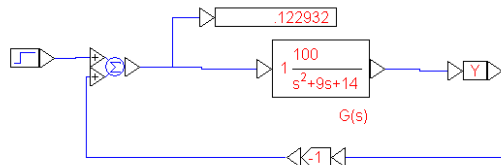
Homework #7: ECE 461/661

Error Constants, Routh Criteria, Sketching a Root Locus. Due Monday, October 9th

Error Constants

1) Determine the error constants and steady-state error for the following systems

G(s)	System Type	Kp	Kv	Error for a unit step input
$\left(\frac{100}{(s+2)(s+7)}\right)$	0	7.14	0	0.1228
$\left(\frac{100}{s(s+2)(s+7)}\right)$	1	inf	7.14	0
$\left(\frac{100(s+5)}{s^2(s+2)(s+7)}\right)$	2	inf	inf	0
$\left(\frac{100}{(s-2)(s+7)}\right)$	0	-7.14	0	-0.1628



Routh Criteria

Determine the range of k that results in a negative definite polynomial (i.e. a stable system)

$$2) \quad (s - 1)(s + 10)(s + 12) + 2k = 0$$

Multiply out

$$s^3 + 21s^2 + 98s - 120 + 2k = 0$$

Place in a Routh table

1	98	0
21	$2k-120$	0
$103.7143 - 0.0952k$ (a)	0	0
$2k - 120$ (b)	0	0
0	0	0

$$k < 1089$$

$$k > 60$$

Result: $60 < k < 1089$

(a) Element (3,1)

$$-\frac{\begin{vmatrix} 1 & 98 \\ 21 & 2k-120 \end{vmatrix}}{21} = 103.7143 - 0.0952k$$

(b) Element (4,1)

$$-\frac{\begin{vmatrix} 21 & 2k-120 \\ 103-0.09k & 0 \end{vmatrix}}{103-0.09k} = 2k - 120$$

$$3) \quad (s + 1)(s + 3)(s + 7)(s + 8) + 2k = 0$$

multiply out

$$s^4 + 19s^3 + 119s^2 + 269s + 168 + 2k = 0$$

Place in a Routh table

1	119	168+2k
19	269	0
104.8421 (a)	168 + 2k	0
238.5542 - 0.3624k (b)	0	
168 + 2k	0	

$$k < 658.17$$

$$k > -84$$

Result: $-84 < k < 658.17$

(a)

$$\frac{- \begin{vmatrix} 1 & 119 \\ 19 & 269 \end{vmatrix}}{19} = 104.8421$$

(b)

$$\frac{- \begin{vmatrix} 19 & 269 \\ 104.8421 & 168+2k \end{vmatrix}}{104.8421} = 238.5542 - 0.3624k$$

Sketching a Root Locus

Sketch the root locus plot for the following systems for $0 < k < \infty$. Also plot the

- real axis loci, break away points, $j\omega$ crossings (if any), and asymptotes

4) $(s - 1)(s + 10)(s + 12) + 2k = 0$

Real Axis Loci

$(+1, -10), (-12, -\infty)$

Breakaway Point(s)

$s = -2.9531$ (found by searching along $s = x + j0.1$ until the angle of $G(s)$ is 180 degrees)

a little right of $s = -4.5$

Asymptotes

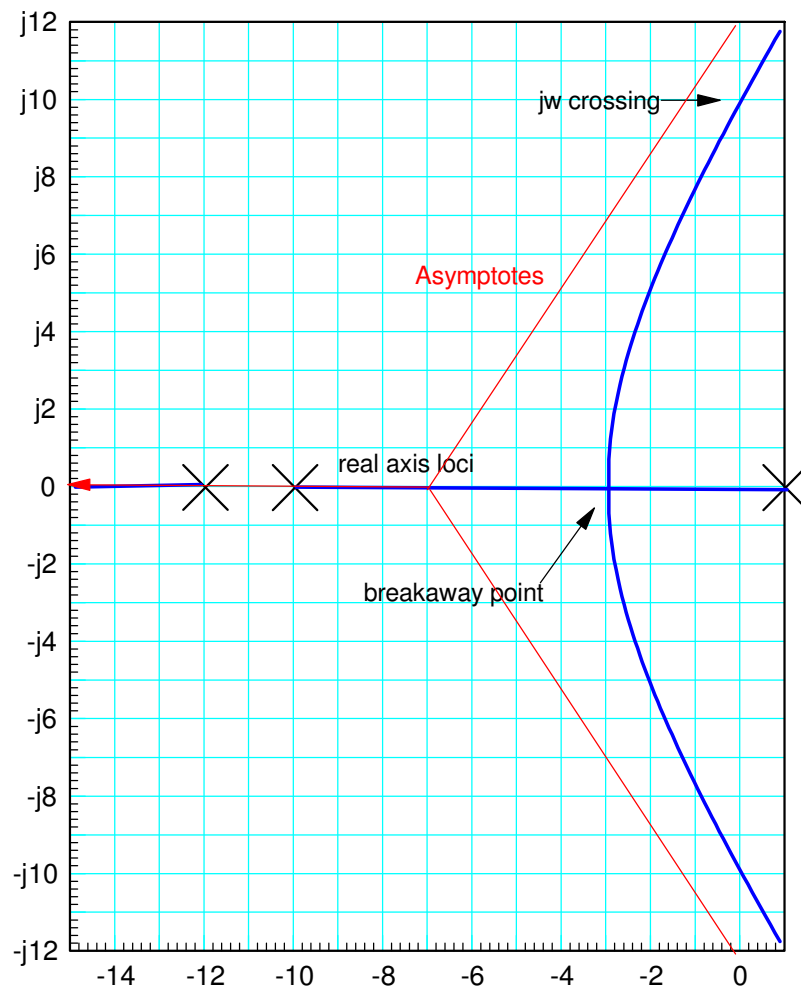
Three asymptotes

Angle = $+60, -60, 180$ degrees

Intercept = -7.000 (average of $+1, -10, -12$)

$j\omega$ Crossing

$s = j9.8995$ (found by searching along $s = jx$ until the angles add to zero)



5) $(s + 1)(s + 3)(s + 7)(s + 8) + 2k = 0$

Real Axis Loci:

$(-1, -3), (-7, -8)$

Breakaway Point(s)

$s = -1.8318, -7.5476$

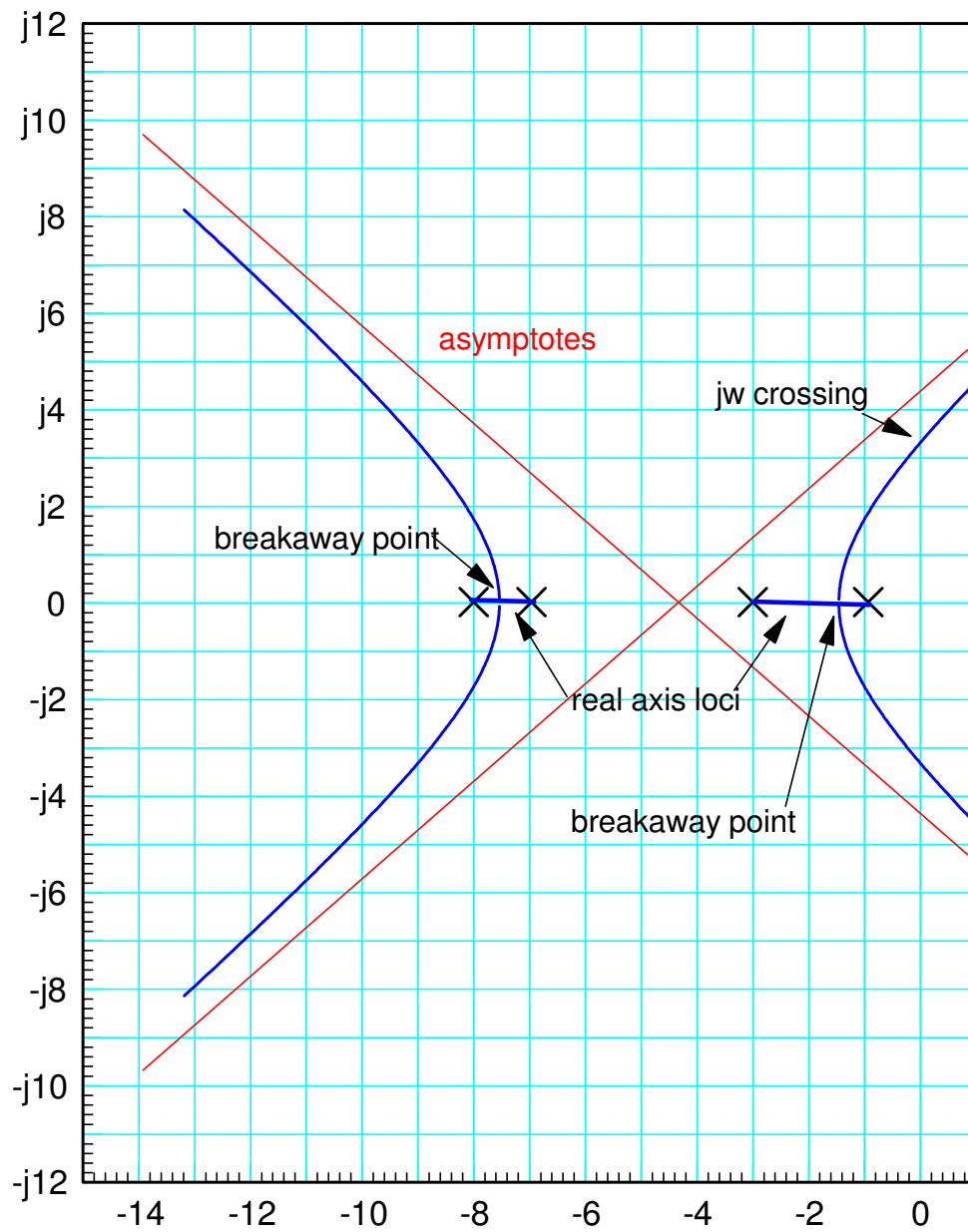
jw Crossing(s)

$s = j3.7627$

Asymptotes

four asymptotes

± 45 degrees, ± 135 degrees



Root Locus with Complex Poles & Zeros

Sketch the root locus plot for the following systems for $0 < k < \infty$. Also plot the

- real axis loci, break away points, jw crossings (if any), asymptotes, and departure/approach angle

$$6) \quad G(s) = \left(\frac{10}{s(s+8)(s+1+j4)(s+1-j4)} \right)$$

Real Axis Loci: $(0, -8)$

Breakaway Point: $s = -5.6450$

jw Crossing: $s = j9.7107$

Departure Angle

$$\angle \left(\frac{10}{s(s+8)(s+1+j4)(s+1-j4)} \right)_{s \rightarrow -1+j4} = 180^\circ$$

$$\angle \left(\frac{10}{s(s+8)(s+1+j4)} \right)_{s=-1+j4} - \theta = 180^\circ$$

$$136.219^\circ - \theta = 180^\circ$$

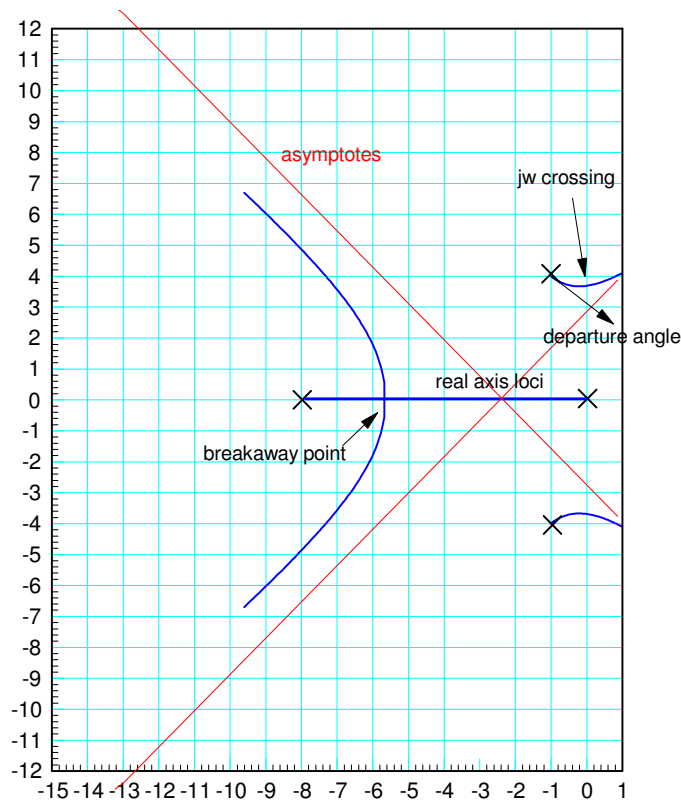
$$\theta = -43.78^\circ$$

Asymptotes

four asymptotes

Asymptote Intersect = -2.5 (average of poles)

Asymptote angles = +/- 45 degrees, +/- 135 degrees



$$7) \quad G(s) = \left(\frac{(s+j2)(s-j2)}{s(s+1)(s+5)(s+6)} \right)$$

Real Axis Loci: (0, -1), (-5, -6)

Breakaway Point: $s = -0.4235$

jw Crossing: none

Approach Angle

$$\angle \left(\frac{(s+j2)(s-j2)}{s(s+1)(s+5)(s+6)} \right)_{s \rightarrow j2} = 180^\circ$$

$$\angle \left(\frac{(s+j2)}{s(s+1)(s+5)(s+6)} \right)_{s=j2} + \theta = 180^\circ$$

$$-103.67^\circ + \theta = 180^\circ$$

$$\theta = -77.63^\circ$$

Asymptotes

two asymptotes (4 poles - 2 zeros)

Asymptote Intersect = -6 (poles - zeros)/(two asymptotes)

Asymptote angles = +/- 90 degrees

