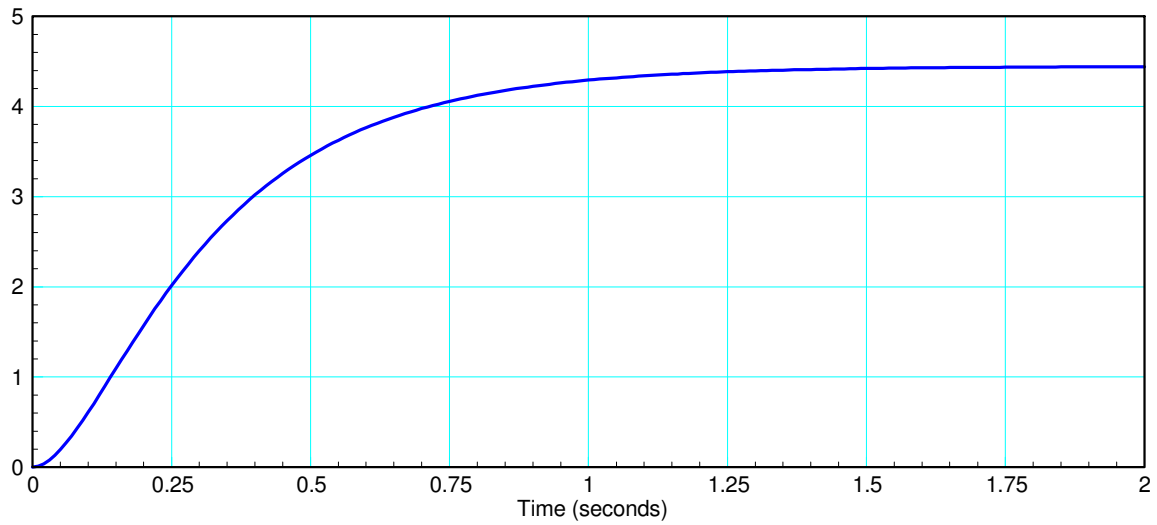


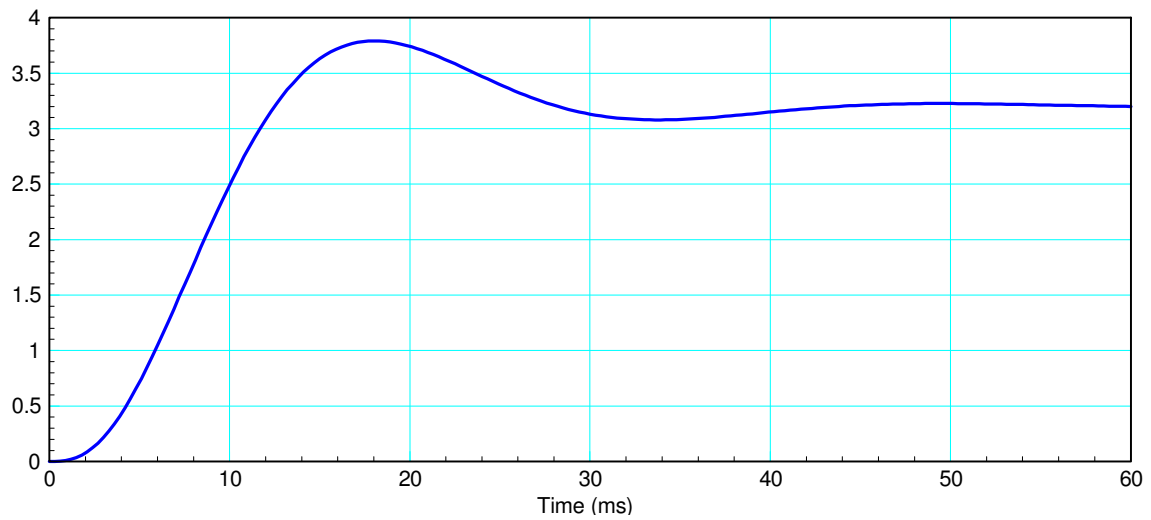
ECE 463/663 Handout #2

1st & 2nd Order Approximations

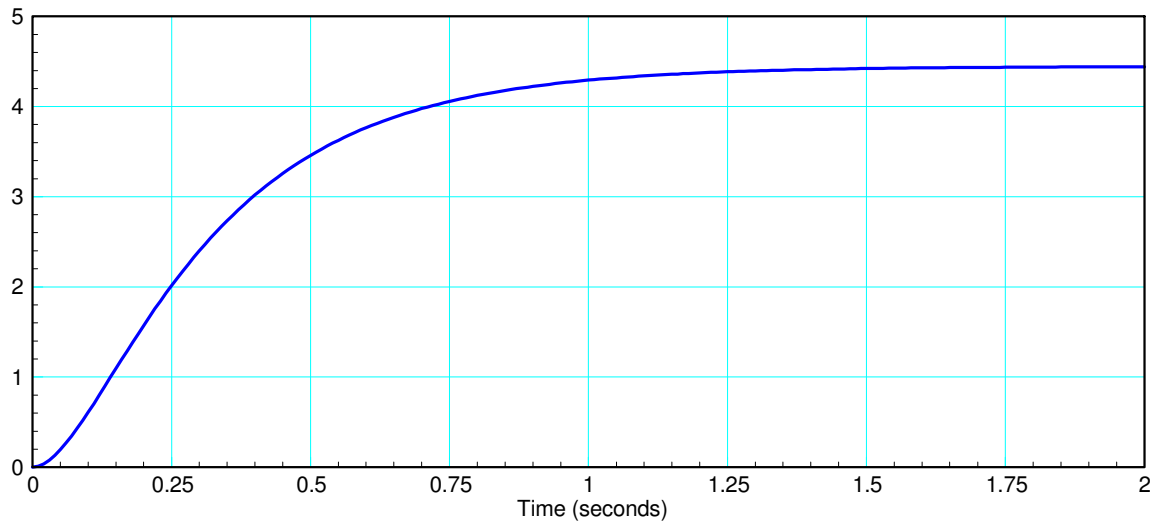
1) Determine the system with the following step response



2) Determine the system with the following step response



1) Determine the system with the following step response



This is a 1st-order system (no oscillation)

$$Y = \left(\frac{a}{s+b} \right) U$$

The DC gain is about 4.4

$$\left(\frac{a}{s+b} \right)_{s=0} = 4.4$$

$$\left(\frac{a}{b} \right) = 4.4$$

The 2% settling time is about 1.25 seconds

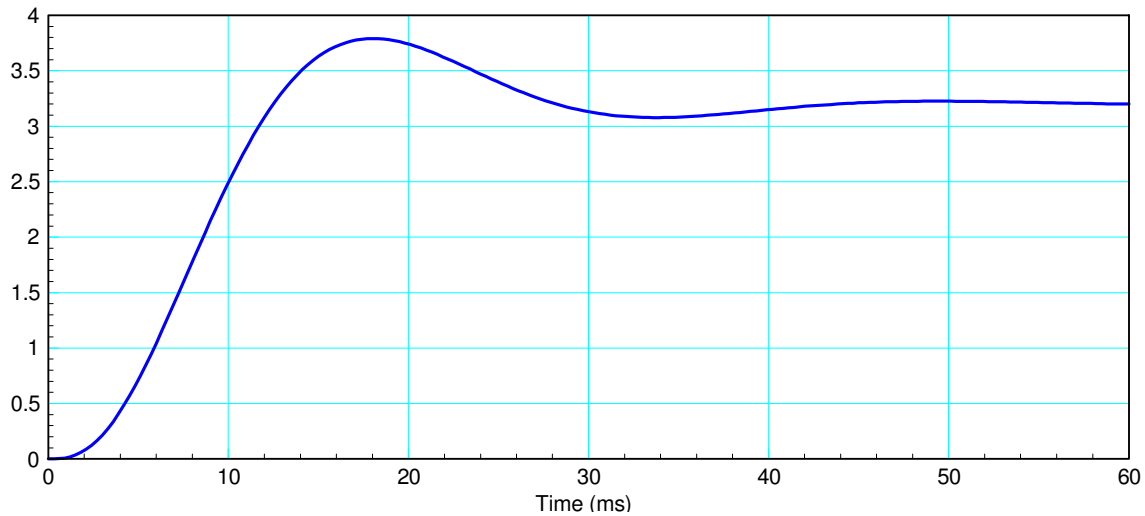
$$\frac{4}{1.25} = b$$

$$b = 3.2$$

so

$$G(s) \approx \left(\frac{14.08}{s+3.2} \right)$$

2) Determine the system with the following step response



This is a second-order system (it has oscillations). There are several ways to write this

$$G(s) = \left(\frac{a}{(s+\sigma+j\omega)(s+\sigma-j\omega)} \right)$$

The 2% settling time is about 40ms

$$\sigma = \frac{4}{40ms} = 100$$

The period is about 33ms (min at $t = 0$, the next min is at $t = 33ms$)

$$f = \frac{1}{period} = \frac{1}{33ms} = 30.3Hz$$

$$\omega = 2\pi f = 190$$

so

$$G(s) \approx \left(\frac{k}{(s+100+j190)(s+100-j190)} \right)$$

The DC gain is 3.2

$$\left(\frac{k}{(s+100+j190)(s+100-j190)} \right)_{s=0} = 3.2$$

$$k = 148,007$$

and

$$G(s) \approx \left(\frac{148,007}{(s+100+j190)(s+100-j190)} \right)$$

